

Perplexing Puzzles Years 3-4

drpaulswan.com.au/teaching-at-home/


Perplexing Puzzles The Queue

1

Two more people are ahead of me in the line than are behind me.

There are three times as many people in line as there are people behind me.

How many people are ahead of me in the line?




© Paul Swan



Perplexing Puzzles Rectangles

2

How many rectangles are in this figure?



© Paul Swan



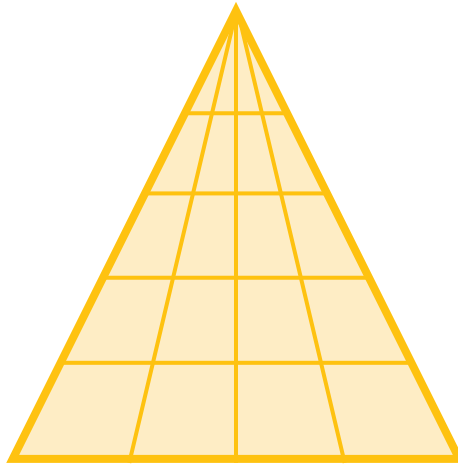
ANSWERS TO PREVIOUS PUZZLES:

1. There are 5 people ahead of me in the line.
2. There are 9 rectangles.

Perplexing Puzzles
Triangles

3

How many triangles are in this figure?



© Paul Swan

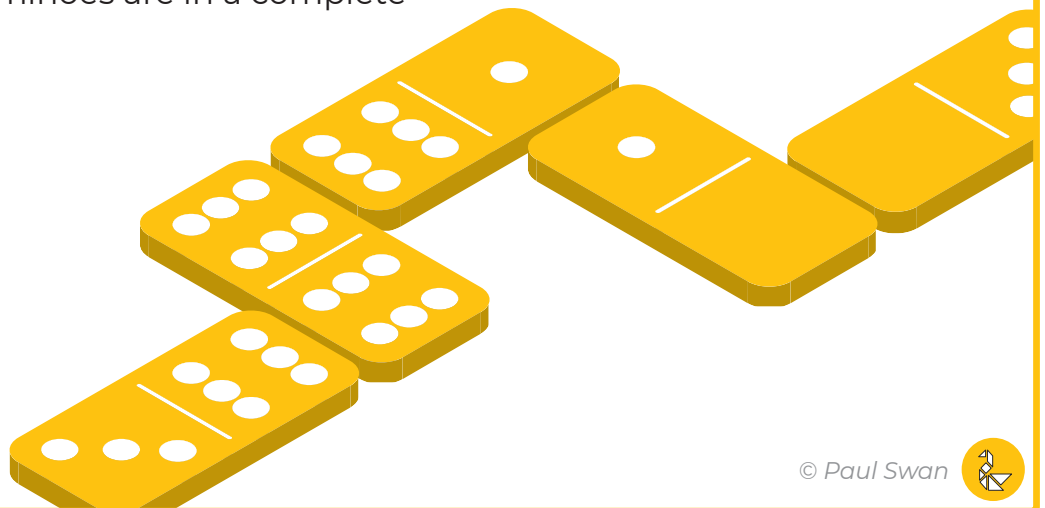


Perplexing Puzzles
Dominoes

4

Each of the two squares on the face of a domino is numbered 1, 2, 3, 4, 5, 6, or left blank.

How many dominoes are in a complete set?



© Paul Swan

